



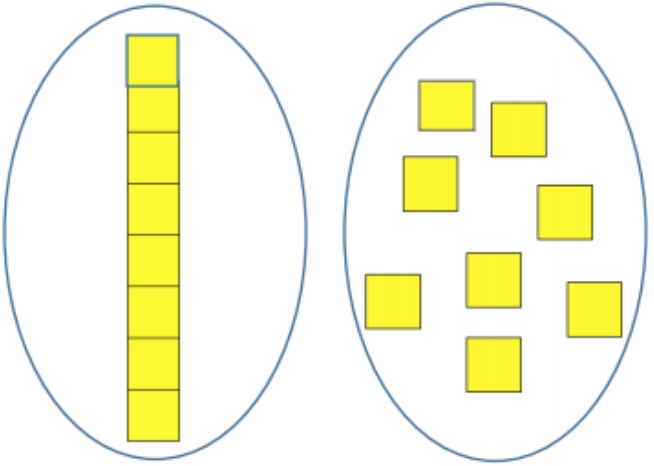



Grade 2 Follow Up Screener 'B'

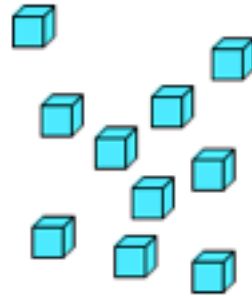
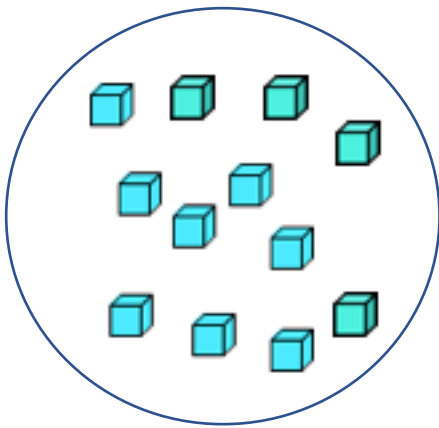
Key

<p>1. How many dogs?</p>  <p style="text-align: center;">6</p>	<p>2. A cage holds 2 hamsters. </p> <p>Count the hamsters in these cages:</p>  <p style="text-align: center;">8</p>
<p>3. What number is shown here?</p>  <p style="text-align: center;">4</p>	<p>4. Are these two sets the same number?</p>  <p style="text-align: center;">Yes</p>


5. Draw 13 circles.



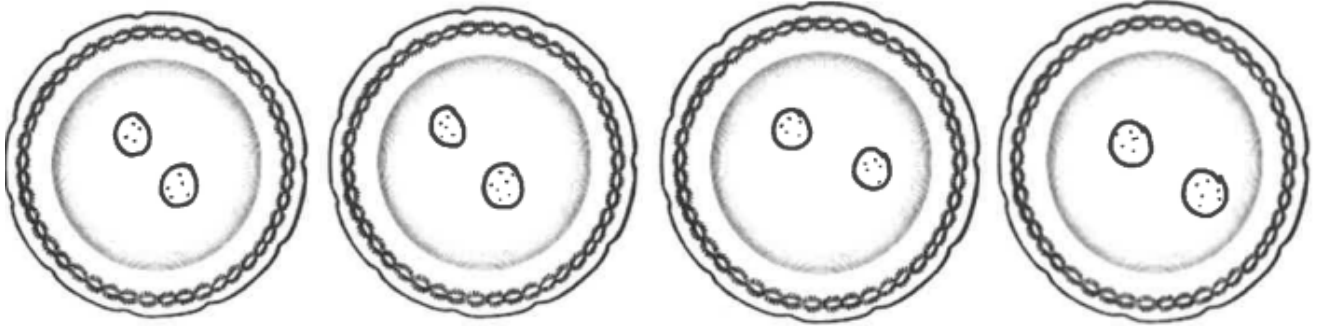
6. Circle the set that has more blocks.



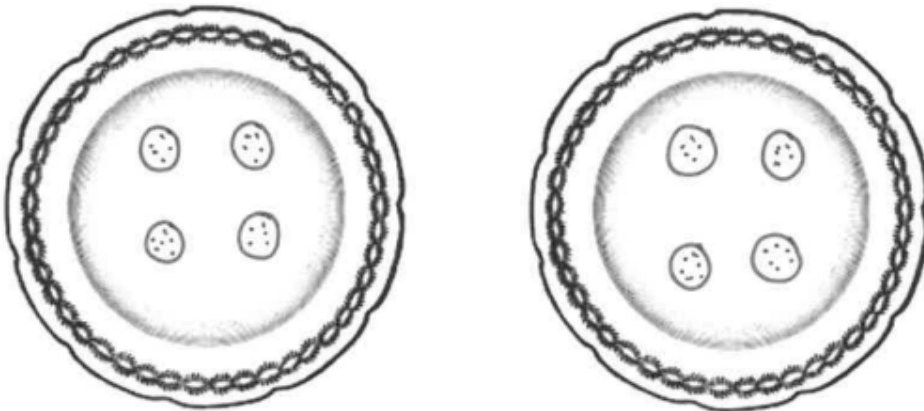
7. Circle the set that has fewer than 4.



8. There are 8 cookies. Share them equally on the four plates by drawing cookies on the plates:



9. There are 8 cookies. Share them equally on the two plates by drawing cookies on the plates:



10. Circle the number that is three more than 10.

14 11 10 13 12

11. The cookie jar has 7 cookies in it. There are 4 more cookies beside the jar. How many cookies are there altogether?



12. Solve:

$$6 + 3 = 9$$

13. Solve:

$$7 + 9 = 16$$

14. Solve:

$$9 - 4 = 5$$

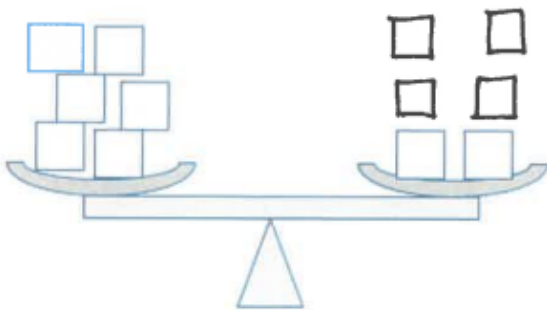
15. Solve:

$$16 - 9 = 7$$

16. Solve:

$$8 - 0 = 8$$

17. Draw blocks to make this scale balance:



18. Complete the pattern.

